



Grade 2

INTERNATIONAL ACADEMIC DECATHLON

2024

Total Questions: 35

Total Marks: 35

Time: 1hr

Set: A

Question: 1 of 25

QID: 689

Marks: 1

You want to persuade someone to go to clown school. Persuade means get someone to do something. What should you write?

- ☐ A. Why don't sharks eat clown fish? Because clown fish taste funny!
- ☐ B. Come to Deb's Clown School! You'll learn all the best magic tricks.

Question: 2 of 25

QID: 695

Marks: 1

Which word is a synonym of home?

- ☐ A. house
- ☐ B. chair

Question: 3 of 25

QID: 696

Marks: 1

Which word is an antonym of first?

- ☐ A. last
- ☐ B. new

Question: 4 of 25

QID: 756

Marks: 1

What kind of sentence is this?

The girls watch the parade every year.

- ☐ A. an exclamation
- ☐ B. a statement

Question: 5 of 25

QID: 757

Marks: 1

Which is a complete sentence?

- ☐ A. Grandpa Keenan throws the ball to Abby.
- ☐ B. My sister knows how to skate she skates at the park.

Select the liquid.

- ☐ A. water in a fishbowl
- ☐ B. clothespin
- ☐ C. rock

It can be fun to play in the snow! But snow can be dangerous too. Snow with strong winds is called a blizzard.

Which picture shows a blizzard?

☐ A.



☐ B.



Which body part works with muscles to move the body?

- ☐ A. lungs
- ☐ B. stomach
- ☐ C. skeleton

Question: 9 of 25

QID: 872

Marks: 1

People use kale plants for food. We usually eat the part of this plant that makes most of the food for the plant.

Which part of the kale plant do we usually eat?

(Hint: A plant's fruit protects its seeds. A plant's leaves make food.)

☐ A. the fruit

☐ B. the leaves

Question: 10 of 25

QID: 878

Marks: 1

Select the living thing.

☐ A. Pine tree

☐ B. Rainboot

Question: 11 of 25

QID: 1704

Marks: 1

Who helps students learn new things and gives them homework to practice?

☐ A. Teacher

☐ B. Doctor

☐ C. Chef

☐ D. Gardener

Look at the image. Then answer the question below.



☐ A. plain

☐ C. island

☐ B. canyon

☐ D. hill

Select the Liberty Bell.

☐ A.



☐ B.



☐ C.



☐ D.



Question: 14 of 25

QID: 1710

Marks: 1

What does it mean to be a good citizen?

☐ A. Keeping everything for yourself

☐ B. Taking things that don't belong to you

☐ C. Helping others and following the rules

☐ D. Ignoring the rules

Everything you can buy is either a good or a service. A good is something you can touch or hold in your hands. A service is a job someone can do for you.

Is teaching piano a good or a service?



☐ A. good

☐ B. service

Question: 16 of 25

QID: 1041

Marks: 1

What is virtual reality?

☐ A. A type of game

☐ B. Way to talk to animals

☐ C. Past memories

☐ D. A technology that creates a simulated environment you can explore

Question: 17 of 25

QID: 1058

Marks: 1

Which country has won the most FIFA World Cup titles?

☐ A. Brazil

☐ B. Germany

☐ C. Argentina

☐ D. Spain

Question: 18 of 25

QID: 1062

Marks: 1

Who was the first woman to win a Nobel Prize?

☐ A. Mother Teresa

☐ B. Florence Nightingale

☐ C. Rosa Parks

☐ D. Marie Curie

Question: 19 of 25

QID: 1073

Marks: 1

How many days are there in a calendar year (excluding a leap year)?

- ☐ A. 365 ☐ B. 366
- ☐ C. 270 ☐ D. 364

Question: 20 of 25

QID: 1083

Marks: 1

What is the white, thing that fall from the sky during winter?

- ☐ A. Snow ☐ B. Fog
- ☐ C. Rain

Question: 21 of 25

QID: 1464

Marks: 1

Counting up from 15, what number comes next?

- ☐ A. 14 ☐ B. 16
- ☐ C. 17 ☐ D. 18

Question: 22 of 25


QID: 1469

Marks: 1

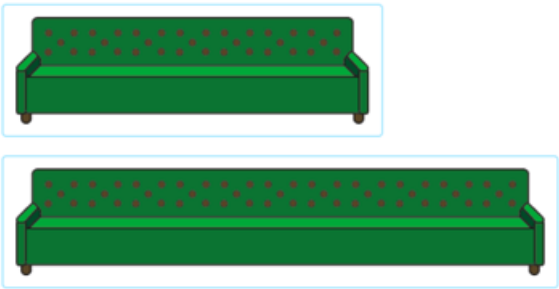
How do you make 2?

- ☐ A. $0 + 2$ ☐ B. $0 + 1$
- ☐ C. $9 - 6$ ☐ D. $7 - 4$

What shape is this?




- ☐ A. Circle
- ☐ B. Triangle
- ☐ C. Square
- ☐ D. Rectangle



Which sofa is longer?

- ☐ A. Picture 1
- ☐ B. Picture 2
- ☐ C. None of the above
- ☐ D. Both



Sarah has 3 red apples and 2 green apples. How many apples does she have in total?

☐ A. 3

☐ B. 4

☐ C. 5

☐ D. 6

— END OF QUESTION PAPER —