



Grade 1

INTERNATIONAL ACADEMIC DECATHLON

2024

Total Questions: 35

Total Marks: 35

Time: 1hr

Set: A

Question: 1 of 25

QID: 1415

Marks: 1

A community is a group of people who live or work together. People in a community have things in common. Which picture shows a community?

☐ A.



a person taking a walk  
through a big forest

☐ B.



students learning together in  
the same classroom


Question: 2 of 25

QID: 1607


Marks: 1

A hill is a piece of land that is a little higher than the land around it. Hills are not as tall as mountains. Pick the hill.

☐ A.



☐ B.



The Lincoln Memorial was built to show the importance of President Abraham Lincoln. It is a white building. Inside the building there is a statue of President Lincoln.

Pick the Lincoln Memorial.

☐ A.



☐ B.



Rules tell people what they must do  
Select the rule.

☐ A.



Alex likes to drink water after lunch.

☐ B.



Students must wait in line for water.

Scarce means there is not enough of something. Which story shows that something is scarce?

☐ A. Abby wants to make scrambled eggs. She has many eggs.

☐ B. Rose wants to make scrambled eggs. But the eggs are gone.

Listen and read along with the story.

Clouds floated across the blue sky, and a gentle breeze blew through the forest. Red and yellow leaves drifted down from the trees.

It was time for Bart's nap, but he was hungry. The brown bear stood up on his back paws to reach the berries. As he gobbled them up, the juice colored his fur purple.



☐ A. IMAGE 1

☐ B. IMAGE 2

Complete the sentence to match the picture.



The Boy has a \_\_\_\_\_

☐ A. fan

☐ B. ball


What does solid mean? Use nearby words to help you figure out the meaning.

The baby only eats soft foods. He can't have solid food yet.

☐ A. old

☐ B. hard

Is the noun a person, animal, place, or thing?



 **hill**

☐ A. person

☐ B. animal

☐ C. place

☐ D. thing

Complete the sentence to match the picture.



The cat is \_\_\_\_\_ the house

☐ A. on

☐ B. inside

## Question: 11 of 25

QID: 818

Marks: 1

Select the living thing.

☐ A. ostrich

☐ B. rainboot

## Question: 12 of 25

QID: 830

Marks: 1

Which part of the body do giraffes use to grab their food?

☐ A. Tongue

☐ B. Feet

## Question: 13 of 25

QID: 848

Marks: 1

Which body part do you use to hear?

☐ A. eyes

☐ B. ears

☐ C. tongue

☐ D. nose

**Question: 14 of 25**

QID: 836

Marks: 1

Nina is picking what to wear to school on Wednesday. She goes outside and feels the air. Nina decides to wear a coat.

What is the weather like?

- ☐ A. Warm and cloudy
- ☐ B. Cold and cloudy
- ☐ C. Cold and sunny
- ☐ D. Warm and sunny

**Question: 15 of 25**

QID: 842

Marks: 1

Is the water in a fishbowl a solid or a liquid?

- ☐ A. a solid
- ☐ B. a liquid

**Question: 16 of 25**

QID: 1040

Marks: 1

What kind of energy is produced by windmills?

- ☐ A. Solar energy
- ☐ B. Wind energy
- ☐ C. Thermal energy
- ☐ D. Hydro energy

**Question: 17 of 25**


QID: 1054

Marks: 1

Which sports star won India's first medal in Badminton at the Olympics?

- ☐ A. P.V. Sindhu
- ☐ B. P.T. Usha
- ☐ C. Saina Nehwal
- ☐ D. Sania Mirza

Which among the following is a famous Japanese animation creator?



- ☐ A. Hayao Miyazaki
- ☐ B. Oda Nobunaga
- ☐ C. Sakamoto Ryoma
- ☐ D. Pranav Kumar

## Question: 19 of 25

QID: 1047

Marks: 1

What is biomimicry?

- ☐ A. Designing products based on patterns and ideas found in nature
- ☐ B. Making robots look like humans
- ☐ C. Copying animals' movements in dance
- ☐ D. Understanding biology

## Question: 20 of 25

QID: 1050

Marks: 1

Which renewable energy sources rely on capturing energy from the sun's rays?

- ☐ A. Wind
- ☐ B. Geothermal
- ☐ C. Solar
- ☐ D. Hydropower

**Question: 21 of 25**

QID: 1464

Marks: 1

Counting up from 15, what number comes next?

- ☐ A. 14
- ☐ B. 16
- ☐ C. 17
- ☐ D. 18

**Question: 22 of 25**

QID: 1469

Marks: 1

How do you make 2?


- ☐ A.  $0 + 2$
- ☐ B.  $0 + 1$
- ☐ C.  $9 - 6$
- ☐ D.  $7 - 4$

**Question: 23 of 25**

QID: 1474



Marks: 1

What shape is this?




- ☐ A. Circle
- ☐ B. Triangle
- ☐ C. Square
- ☐ D. Rectangle





Which sofa is longer?

- ☐ A. Picture 1
- ☐ B. Picture 2
- ☐ C. None of the above
- ☐ D. Both



Sarah has 3 red apples and 2 green apples. How many apples does she have in total?

- ☐ A. 3
- ☐ B. 4
- ☐ C. 5
- ☐ D. 6

— END OF QUESTION PAPER —